



FUNCTIONAL SKILLS MATHS & ENGLISH

LEVEL 1 & 2 EXAMS

WHO WE ARE

Leading training company for 26 years

Intech Centre is an established training provider based in Islington, London, with over 26 years of experience in delivering education, employability and digital skills programmes.

Intech Centre specialises in **Functional Skills English and Maths Level 1 & 2**, helping learners successfully pass Level 1 and Level 2 Functional Skills exams required for university entry, apprenticeships, teacher training, nursing courses and many other professional pathways.

Thousands of learners have used our resources, courses and exam services to achieve nationally recognised qualifications.

[BOOK NOW](#)[LEARN MORE](#)

** The materials in this document are the intellectual property of the relevant awarding organisation and are shared for educational and revision purposes only. Intech Centre does not claim ownership of these materials and all rights remain with the respective awarding body.*

SERVICES

Courses

- Functional Skills Maths
- Functional Skills English

Tutoring

- Functional Skills Maths & English Exam Tutoring

EXAMS

- ➔ Functional Skills **Maths** Level 1 or 2 Exam **in London**
- ➔ Functional Skills **English** Level 1 or 2 Exam **in London**
- ➔ **Online** Functional Skills **Maths** Level 1 or 2 Exam
- ➔ **Online** Functional Skills **English** Level 1 or 2 Exam



www.intechcentre.com



362 Essex Road
Islington N1 3PD



020 7354 5655

BOOK YOUR FUNCTIONAL SKILLS EXAM NOW!

Please write clearly in block capitals.

Centre number

Candidate number

Surname _____

Forename(s) _____

Candidate signature _____

I declare this is my own work.

Functional Skills Level 2 MATHEMATICS


Paper 2 Calculator

Time allowed: 1 hour 30 minutes

Materials

For this paper you must have:

- a calculator
- mathematical instruments.



Instructions

- Use black ink or black ball-point pen. Draw diagrams in pencil.
- Answer **all** questions.
- You must answer the questions in the spaces provided. Do not write outside the box around each page or on blank pages.
- If you need extra space for your answer(s), use the lined pages at the end of this book. Write the question number against your answer(s).
- Do all rough work in this book. Cross through any work you do not want to be marked.
- State the units of your answer where appropriate.

Information

- The marks for questions are shown in brackets.
- The maximum mark for this paper is 60.
- You may ask for more answer paper, graph paper and tracing paper. These must be tagged securely to this answer book.
- If your calculator does not have a π button, take the value of π to be 3.142

Advice

In all calculations, show clearly how you work out your answer.

For Examiner's Use	
Question	Mark
1–7	
8	
9	
10	
11	
TOTAL	



Section AAnswer **all** questions in the spaces provided.

- 1** Circle the **smallest** number.

[1 mark]

1

-5

-3

0

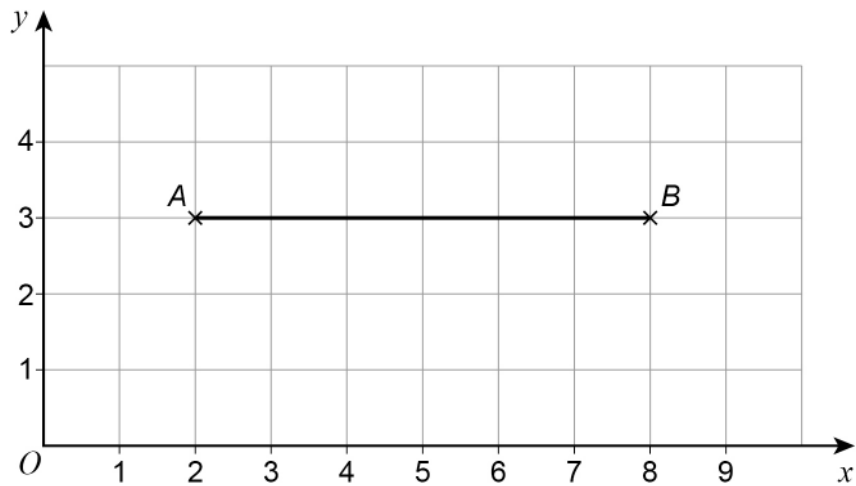
- 2** Complete the table to show equivalent fractions, decimals and percentages.

[3 marks]

Fraction	Decimal	Percentage
$\frac{17}{20}$	0.85	
$\frac{1}{25}$		4%
	0.59	59%



- 3 $A(2, 3)$ and $B(8, 3)$ are points on a grid.



Work out the coordinates of the **midpoint** of line AB .

[1 mark]

Answer (_____ , _____)

- 4 Here are six numbers.

7 10 13 7 15 8

Work out the median.

[2 marks]

Answer _____

Turn over ►



5 Express 76 as a percentage of 200

[1 mark]

Answer _____ %

6 Share 126 in the ratio 3 : 11

[2 marks]

Answer _____ and _____



- 7 Which is closer to 9.5
9.073 or 9.916 ?

You **must** show your working.

[2 marks]

Answer _____

12

Turn over for the next section

Turn over ►



Section B

Answer **all** questions in the spaces provided.

8 Pets

- 8 (a)** Miya manages a pet shop.
She reduces the price of all fish tanks by 17%
She puts this sticker on one of the tanks.

Reduced by 17%
Was £195
Now £167.95

Has Miya calculated the new price correctly?
You **must** show your working.

[3 marks]

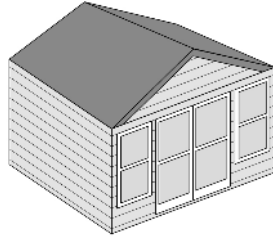


9 Summer house

Lisa is buying a summer house for her garden.

9 (a)

Summer house	£5964
Delivery charge	£2.25 per mile

**Payment plan**

Deposit of $\frac{2}{7}$ of the total price including delivery
then 12 equal monthly payments

Lisa buys the summer house, with a delivery charge for 84 miles.
She uses the payment plan.

Work out the deposit and the amount of each monthly payment.

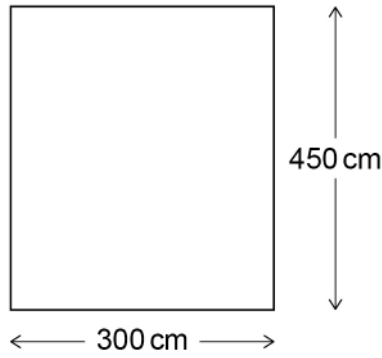
[6 marks]

Deposit £ _____

Monthly payment £ _____

Turn over ►

9 (b) The base of the summer house has dimensions 300 cm by 450 cm



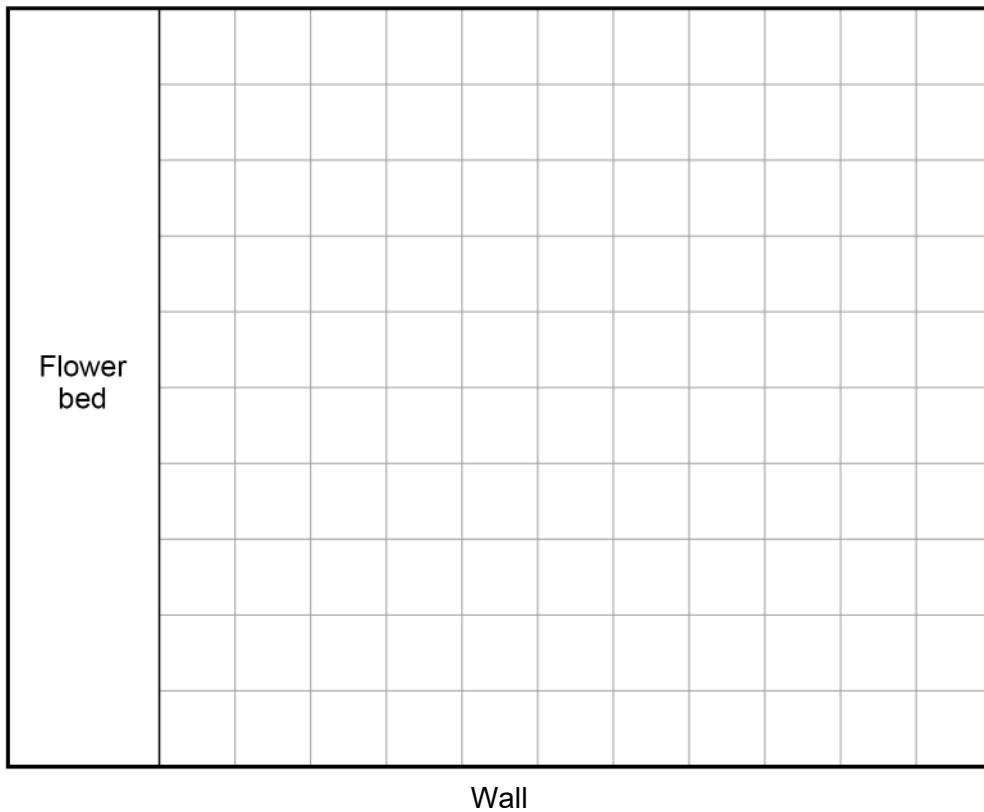
Not drawn
accurately

Lisa's garden is drawn to a scale of 1 to 100 on a centimetre grid.
There is a wall at the bottom of the garden and a flower bed down one side.
Lisa wants to put the summer house
at least 400 cm from the wall
and
at least 500 cm from the flower bed.

On the centimetre grid, show where Lisa can put the summer house.

[3 marks]

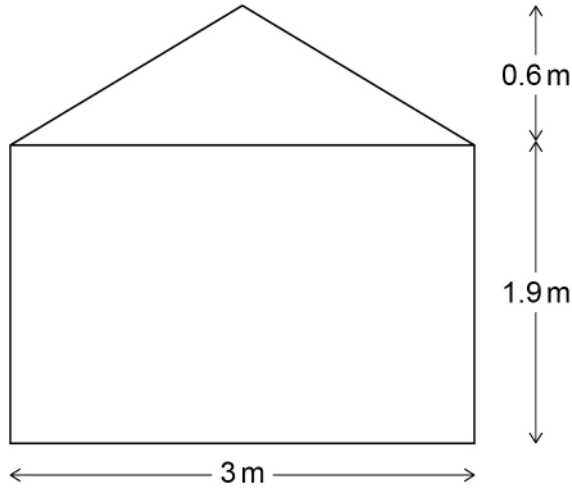
Scale: 1 to 100



- 9 (c) Lisa is buying a heater for the summer house.
To work out the correct heater size she uses the formula

$$\text{Minimum heater size (kW)} = \text{area of the front (m}^2\text{)} \times \text{length (m)} \times 0.058$$

Here is the front view of the summer house.



Not drawn
accurately

The length of the summer house is 4.5 m
Lisa can buy a 1 kW heater or a 2 kW heater.

Which heater should she buy?
You **must** show your working.

[5 marks]

Answer _____



11 (c) The table shows the ages of children at the centre one day.

Age	Number of children
3 and under	8
4–6	15
7–9	13
10 and over	4

One of the children is chosen at random to win a free soft play visit.

The manager says,

“The probability that the child is aged 7–9 is **more than** $\frac{3}{10}$ ”

Is the manager correct?

You **must** show your working.

[3 marks]

13

END OF QUESTIONS



There are no questions printed on this page

*Do not write
outside the
box*

**DO NOT WRITE ON THIS PAGE
ANSWER IN THE SPACES PROVIDED**





Book Your Functional Skills Exam Now!

Intech Centre is a leading training, careers and examination centre based in Islington, London, delivering Functional Skills Maths and English courses and exams for over 26 years.



Book Now!



Book Your Exams & Courses

Qualification	Private Course	Online Exam	Exam in London
Functional Skills Maths Level 1 & 2	Enrol on Course	Book Online Exam	Book London Exam
Functional Skills English Level 1 & 2	Enrol on Course	Book Online Exam	Book London Exam

Why Intech Centre?

- Over **26 years' experience** as a UK training and exam centre in London.
- **City & Guilds Functional Skills Maths and English exams**, Ofqual regulated and nationally recognised.
- Flexible **online learning** with 24/7 access plus online or centre-based exam options.
- Ideal if you still need GCSE Maths or English equivalent for university entry, teacher training, apprenticeships or employment.

CALL US FOR MORE INFORMATION:



020 7354 5655



www.intechcentre.com



info@intechcentre.com