



# FUNCTIONAL SKILLS MATHS & ENGLISH

## LEVEL 1 & 2 EXAMS

### WHO WE ARE

## Leading training company for 26 years

Intech Centre is an established training provider based in Islington, London, with over 26 years of experience in delivering education, employability and digital skills programmes.

Intech Centre specialises in **Functional Skills English and Maths Level 1 & 2**, helping learners successfully pass Level 1 and Level 2 Functional Skills exams required for university entry, apprenticeships, teacher training, nursing courses and many other professional pathways.

Thousands of learners have used our resources, courses and exam services to achieve nationally recognised qualifications.

[BOOK NOW](#)[LEARN MORE](#)

*\* The materials in this document are the intellectual property of the relevant awarding organisation and are shared for educational and revision purposes only. Intech Centre does not claim ownership of these materials and all rights remain with the respective awarding body.*

### SERVICES

## Courses

- Functional Skills Maths
- Functional Skills English

## Tutoring

- Functional Skills Maths & English Exam Tutoring

## EXAMS

- ➔ Functional Skills **Maths** Level 1 or 2 Exam **in London**
- ➔ Functional Skills **English** Level 1 or 2 Exam **in London**
- ➔ **Online** Functional Skills **Maths** Level 1 or 2 Exam
- ➔ **Online** Functional Skills **English** Level 1 or 2 Exam



[www.intechcentre.com](http://www.intechcentre.com)



362 Essex Road  
Islington N1 3PD



020 7354 5655

**BOOK YOUR FUNCTIONAL SKILLS EXAM NOW!**

Please check the examination details below before entering your candidate information

Candidate surname

Other names

**Pearson Edexcel  
Functional Skills**

Centre Number

Candidate Number

**\*\*\*Past Paper 4\*\*\***

Time: 25 minutes

Paper Reference **PMAT2/N04**

**Mathematics**  
**Level 2**  
**Section A (Non-Calculator)**



**You must have:**

Pen, HB pencil, eraser, ruler graduated in cm and mm, protractor, pair of compasses. Tracing paper may be used.

Total Marks

**My signature confirms that I will not discuss the content of the test with anyone.**

Signature: \_\_\_\_\_

**Instructions**

- Use **black** ink or ball-point pen.
- **Fill in the boxes** at the top of this page with your name, centre number and candidate number.
- Sign the declaration.
- Answer **all** questions.
- Write your final answers in the boxes provided.
- Answer the questions in the spaces provided – *there may be more space than you need.*
- You **must** show clearly how you get your answers in the spaces provided. Marks will be awarded for your working out.
- Check your working and answers at each stage.
- Diagram are **not** accurately drawn, unless otherwise indicated.
- **Calculators may not be used.**
- Take the value of  $\pi$  to be 3.14

**Information**

- The total mark for this section is 16.
- The marks for **each** question are shown in brackets  
– *use this as a guide as to how much time to spend on each question.*
- This sign  shows where marks will be awarded for showing your checks.

**Advice**

- Read each question carefully before you start to answer it.
- Check your answers if you have time at the end.

Turn over ►


P67283A

©2020 Pearson Education Ltd.

1/1/1



  
**Pearson**



BLANK PAGE

DO NOT WRITE IN THIS AREA

DO NOT WRITE IN THIS AREA

DO NOT WRITE IN THIS AREA

DO NOT WRITE IN THIS AREA

DO NOT WRITE IN THIS AREA

DO NOT WRITE IN THIS AREA



DO NOT WRITE IN THIS AREA

DO NOT WRITE IN THIS AREA

DO NOT WRITE IN THIS AREA

DO NOT WRITE IN THIS AREA

DO NOT WRITE IN THIS AREA

DO NOT WRITE IN THIS AREA

### SECTION A

Answer ALL questions. Write your answers in the spaces provided.

- 1 Shannon works in a mobile phone shop.

This week Shannon makes

- 19 pay as you go phone sales
- 57 SIM card with handset contract sales.

The remaining sales were SIM card only contracts.

Shannon made a total of 114 sales during this week.

What fraction of the sales made by Shannon this week were SIM card only contracts?  
Write your fraction in its simplest form.

(3)

(Total for Question 1 is 3 marks)



2 Grace and James share £72 in the ratio 4:5

(a) Work out the amount of money that James gets.  
You **must** show your working.

(2)

£



(b) Show a check of your working.

(1)

(Total for Question 2 is 3 marks)

DO NOT WRITE IN THIS AREA

DO NOT WRITE IN THIS AREA

DO NOT WRITE IN THIS AREA

DO NOT WRITE IN THIS AREA

DO NOT WRITE IN THIS AREA

DO NOT WRITE IN THIS AREA



DO NOT WRITE IN THIS AREA

DO NOT WRITE IN THIS AREA

DO NOT WRITE IN THIS AREA

DO NOT WRITE IN THIS AREA

DO NOT WRITE IN THIS AREA

DO NOT WRITE IN THIS AREA

- 3** Brian collects loyalty points at the supermarket.  
The total value of the loyalty points he has collected is £17.50

Brian has this information.

Exchange loyalty points for  
travel vouchers and get  
3 times the value

Travel vouchers can be used to pay for ferry tickets.

Brian wants to book 2 ferry tickets.  
The ferry tickets cost £33.25 and £29

Brian will exchange all his loyalty points for travel vouchers.  
He will use all the travel vouchers towards the cost of the ferry tickets.

Brian will pay for the rest of the cost of the ferry tickets with his bank card.

How much will Brian pay with his bank card?

(4)

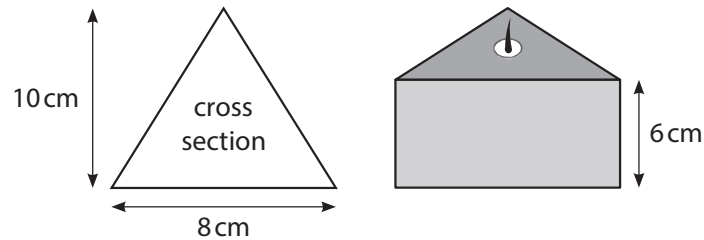
£

(Total for Question 3 is 4 marks)



- 4 Zia makes and sells candles.  
She wants to make candles in the shape of a triangular prism.

Zia has this sketch of the triangular face and the candle.



Zia will melt wax to make the candles.  
She knows that

- each 1 kg of solid wax makes 1.2 litres of melted wax
- 1 litre = 1000 cm<sup>3</sup>
- the volume of a prism = area of cross section  $\times$  height

Zia has a 5 kg bag of solid wax.  
She thinks that she can make at least 20 candles with this bag of solid wax.

Is Zia correct?  
Show why you think this.

(6)

DO NOT WRITE IN THIS AREA

DO NOT WRITE IN THIS AREA

DO NOT WRITE IN THIS AREA

DO NOT WRITE IN THIS AREA

DO NOT WRITE IN THIS AREA

DO NOT WRITE IN THIS AREA



DO NOT WRITE IN THIS AREA

DO NOT WRITE IN THIS AREA

DO NOT WRITE IN THIS AREA

DO NOT WRITE IN THIS AREA

DO NOT WRITE IN THIS AREA

DO NOT WRITE IN THIS AREA

**(Total for Question 4 is 6 marks)**

---

**TOTAL FOR SECTION A IS 16 MARKS**



DO NOT WRITE IN THIS AREA

DO NOT WRITE IN THIS AREA

DO NOT WRITE IN THIS AREA

BLANK PAGE



Please check the examination details below before entering your candidate information

Candidate surname

Other names

**Pearson Edexcel  
Functional Skills**

Centre Number

Candidate Number

**\*\*\*Past Paper 4\*\*\***

Time: 1 hour 30 minutes

Paper Reference **PMAT2/C04**

**Mathematics**  
**Level 2**  
**Section B (Calculator)**



**You must have:**

Pen, HB pencil, eraser, ruler graduated in cm and mm, protractor, pair of compasses. Tracing paper may be used.

Total Marks

**My signature confirms that I will not discuss the content of the test with anyone.**

Signature: \_\_\_\_\_

### Instructions

- Use **black** ink or ball-point pen.
- **Fill in the boxes** at the top of this page with your name, centre number and candidate number.
- Sign the declaration.
- Answer **all** questions.
- Write your final answers in the boxes provided.
- Answer the questions in the spaces provided – *there may be more space than you need.*
- You **must** show clearly how you get your answers in the spaces provided. Marks will be awarded for your working out.
- Check your working and answers at each stage.
- Diagram are **not** accurately drawn, unless otherwise indicated.
- **Calculators may be used.**
- If your calculator does not have a  $\pi$  button take the value of  $\pi$  to be 3.14

### Information

- The total mark for this section is 48.
- The total mark for this paper is 64.
- The marks for **each** question are shown in brackets – *use this as a guide as to how much time to spend on each question.*
- This sign  shows where marks will be awarded for showing your checks.

### Advice

- Read each question carefully before you start to answer it.
- Check your answers if you have time at the end.

Turn over ►

P67284A

©2020 Pearson Education Ltd.

1/1/1/1



  
Pearson

**SECTION B**

**Answer ALL questions. Write your answers in the spaces provided.**

- 1 Johan is cooking using an old recipe.  
The recipe says to preheat the oven to a temperature of 350°F.

The oven Johan uses is marked in centigrade (°C).  
He finds this formula to change from °F to °C.

$$C = \frac{5(F - 32)}{9}$$

$C$  = temperature °C  
 $F$  = temperature °F

Johan sets the oven temperature to 190°C.

Has Johan set the oven to the correct temperature for this recipe?

(3)

**(Total for Question 1 is 3 marks)**

DO NOT WRITE IN THIS AREA

DO NOT WRITE IN THIS AREA

DO NOT WRITE IN THIS AREA

DO NOT WRITE IN THIS AREA

DO NOT WRITE IN THIS AREA

DO NOT WRITE IN THIS AREA



DO NOT WRITE IN THIS AREA

DO NOT WRITE IN THIS AREA

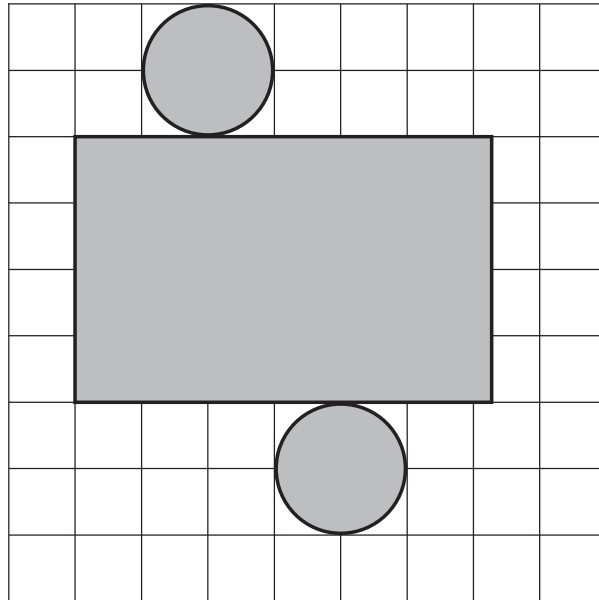
DO NOT WRITE IN THIS AREA

DO NOT WRITE IN THIS AREA

DO NOT WRITE IN THIS AREA

DO NOT WRITE IN THIS AREA

2 Here is the net of a 3D object.



**Key** 1 cm on the grid represents 5 cm on the 3D object

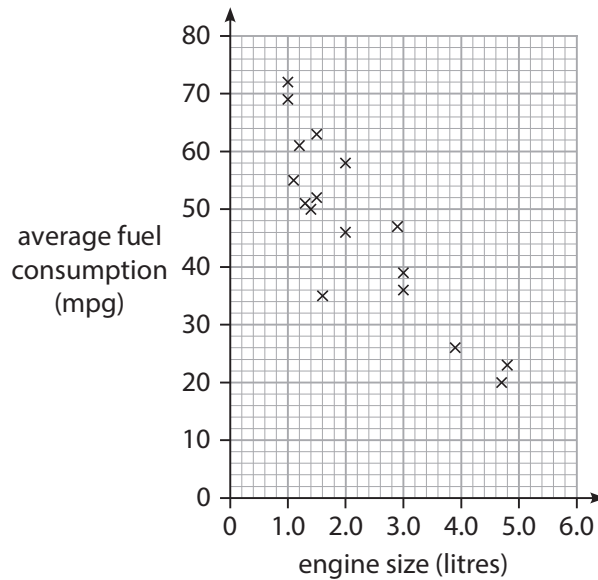
Draw a sketch of the 3D object.  
Remember to label the dimensions on your sketch.

(3)

(Total for Question 2 is 3 marks)



- 3 The scatter diagram shows some information about the engine size in litres and average fuel consumption in miles per gallon (mpg) of some cars.



Here is the information for another car

- engine size 2.3 litres, average fuel consumption 36 mpg.

(a) Plot this information on the scatter graph.

(1)

(b) Draw a line of best fit on the scatter graph.

(1)

Mikael buys a car with an engine size of 4.2 litres.

(c) Use your line of best fit to estimate the average fuel consumption of this car.

(1)

mpg

(d) What type of correlation is shown in this scatter diagram?

Tick  a box to show your answer.

(1)

unlikely

negative

even

neutral

positive

likely

(Total for Question 3 is 4 marks)



DO NOT WRITE IN THIS AREA

DO NOT WRITE IN THIS AREA

DO NOT WRITE IN THIS AREA

DO NOT WRITE IN THIS AREA

DO NOT WRITE IN THIS AREA

DO NOT WRITE IN THIS AREA

4

(a) Work out  $\frac{(3^3 - 4^2) + 7}{2.5}$

(1)

(b) Write the following values in order of size.  
Start with the smallest value.

0.5       $\frac{5}{9}$       0.53       $\frac{4}{7}$       47%

(2)

(Total for Question 4 is 3 marks)

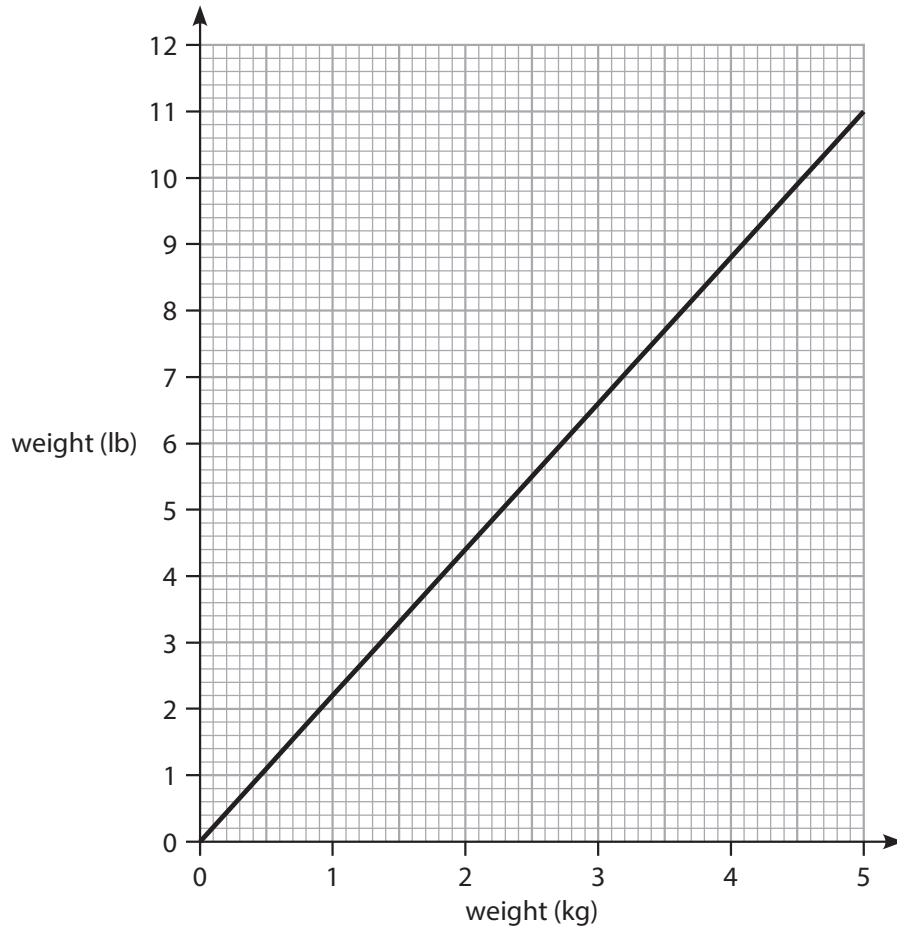


- 5 Misbah is a midwife at her local hospital. She is writing a report about changes in the average weight of a baby at birth.

Misbah has this information about birth weights in 2018 at the hospital.

Weight (kg)	2.9	3.0	3.1	3.2	3.3	3.4	3.5	3.6	3.7
Frequency	26	48	74	113	167	132	109	92	36

Misbah can use this graph to change between kg and lb.



Misbah wants to write about the percentage change in the modal weight of a baby from 1998 to 2018

She finds out that the **modal** weight of a baby in 1998 was 7.7 lb

DO NOT WRITE IN THIS AREA

DO NOT WRITE IN THIS AREA

DO NOT WRITE IN THIS AREA

DO NOT WRITE IN THIS AREA

DO NOT WRITE IN THIS AREA

DO NOT WRITE IN THIS AREA



DO NOT WRITE IN THIS AREA

DO NOT WRITE IN THIS AREA

DO NOT WRITE IN THIS AREA

DO NOT WRITE IN THIS AREA

DO NOT WRITE IN THIS AREA

DO NOT WRITE IN THIS AREA

What is the percentage change in the modal weight of a baby from 1998 to 2018?  
Write your answer to the nearest whole number.

(5)

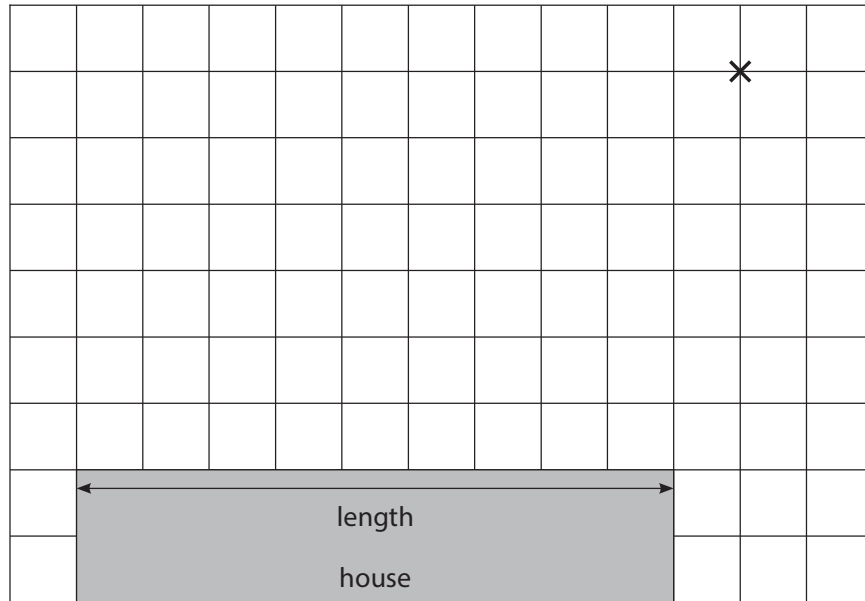
%

(Total for Question 5 is 5 marks)



6 Kasim wants an extension built onto his house.

The diagram shows part of the house and the centre of a tree.



**Key** 1 cm on the grid represents ..... m on the ground  
X represents centre of tree

The length of the house is 36 m.

(a) Complete the key.

(1)

The extension will be in the shape of a rectangle with width of 10 m and the same length as the house.

The roots of the tree grow in a circular shape.

The roots grow to a maximum length of 20 m from the centre of the tree.

The extension will need deep foundations if built over the roots.

(b) Will the extension need deep foundations?  
Use the grid to show why you think this.

(2)



(Total for Question 6 is 3 marks)

DO NOT WRITE IN THIS AREA

DO NOT WRITE IN THIS AREA

DO NOT WRITE IN THIS AREA

DO NOT WRITE IN THIS AREA

DO NOT WRITE IN THIS AREA

DO NOT WRITE IN THIS AREA



DO NOT WRITE IN THIS AREA

DO NOT WRITE IN THIS AREA

DO NOT WRITE IN THIS AREA

DO NOT WRITE IN THIS AREA

DO NOT WRITE IN THIS AREA

DO NOT WRITE IN THIS AREA

7 Tess works for a drinks company.  
She is told that it is better for the environment if less metal is used when making cans.

She starts to design a new can that is taller and narrower than the old can.  
The new can

- is in the shape of a cylinder
- has a diameter of 52 mm
- has a height of 154 mm
- holds the same amount of drink.

Tess knows that  $27\,332\text{ mm}^2$  of metal is used to make the top, the side and the bottom of each old can.

She thinks that her design will use less metal to make the top, the side and the bottom of each new can.

Is Tess correct?  
Show why you think this.

(4)

(Total for Question 7 is 4 marks)



8 Last week 263 people passed their driving test at a test centre.

The table shows information about the number of driving tests these people took before passing.

Number of driving tests taken	Frequency
1	118
2	74
3	43
4	21
5 or more	7

(a) What is the probability that a person chosen at random passed their driving test on the first attempt?

(1)

(b) What is the probability that a person chosen at random did not pass their driving test on the first attempt?

(2)

DO NOT WRITE IN THIS AREA

DO NOT WRITE IN THIS AREA

DO NOT WRITE IN THIS AREA

DO NOT WRITE IN THIS AREA

DO NOT WRITE IN THIS AREA

DO NOT WRITE IN THIS AREA



DO NOT WRITE IN THIS AREA

DO NOT WRITE IN THIS AREA

DO NOT WRITE IN THIS AREA

DO NOT WRITE IN THIS AREA

DO NOT WRITE IN THIS AREA

DO NOT WRITE IN THIS AREA

Keely sees a car she wants to buy.  
The purchase price of the car is £4200

She can pay the purchase price in full or use this payment plan.

**Payment plan**

Pay  $\frac{2}{5}$  of purchase price today

24 monthly payments of £112.90

Keely knows that using the payment plan will cost more than paying in full.

(c) How much more will Keely pay using the payment plan?

(3)

£

(Total for Question 8 is 6 marks)



9 Ryan is doing a project about sugar at school.  
He wants to compare the amount of sugar in grapes with the amount of sugar in cookie dough.

Ryan finds this information

- grapes weighing 92 g contain 15 g of sugar
- cookie dough weighing 610 g contains 110 g of sugar.

Ryan thinks that there is a higher percentage of sugar in the cookie dough than in the grapes.

Is Ryan correct?  
Show why you think this.

(3)

(Total for Question 9 is 3 marks)

DO NOT WRITE IN THIS AREA

DO NOT WRITE IN THIS AREA

DO NOT WRITE IN THIS AREA

DO NOT WRITE IN THIS AREA

DO NOT WRITE IN THIS AREA

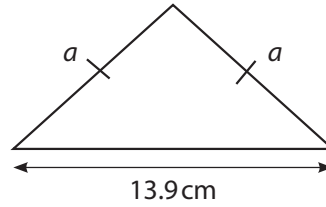
DO NOT WRITE IN THIS AREA



10 Here is an isosceles triangle.

It has a

- base length of 13.9 cm
- perimeter of 38.2 cm.



(a) Work out the length of side  $a$  on the triangle.

(2)

$a =$   cm

Here are some calculations.

$$40 \div 14$$

$$40 - 10 - 10$$

$$14 \times 38$$

$$\frac{40 - 14}{2}$$

$$38 - 14 \times 2$$

$$\frac{40 + 14}{2}$$

$$38 - 14 - 14$$



(b) Which calculation is suitable as a check using estimation?

Tick  the calculation to show your answer.

(1)

(Total for Question 10 is 3 marks)



11

(a) Write 6.8% as a decimal.

(1)

Jess invests £3800 into a savings account for 3 years.

She will not put any extra money into the account.

She will not take any money out of the account.

The investment will earn 2.4% compound interest per year.

(b) Work out the total amount of interest earned after 3 years.

(4)

DO NOT WRITE IN THIS AREA

DO NOT WRITE IN THIS AREA

DO NOT WRITE IN THIS AREA

DO NOT WRITE IN THIS AREA

DO NOT WRITE IN THIS AREA

DO NOT WRITE IN THIS AREA



DO NOT WRITE IN THIS AREA

DO NOT WRITE IN THIS AREA

DO NOT WRITE IN THIS AREA

DO NOT WRITE IN THIS AREA

DO NOT WRITE IN THIS AREA

DO NOT WRITE IN THIS AREA

£

(Total for Question 11 is 5 marks)



12 Andy works at a medical centre.

He reads a news report about a shortage of doctors in some parts of the UK.

The report states the following figures for the UK

- the average number of patients per doctor is 1734
- the range is 826 patients per doctor.

The table shows some information about the number of patients for each doctor at the medical centre.

Doctor	Number of patients
A	1348
B	1847
C	1760
D	1562
E	1240
F	1703

Andy needs to write a report to compare the figures for the medical centre with the figures for the UK.

He needs to comment on

- a comparison of the average number of patients per doctor
- the consistency of the number of patients per doctor.

Write comments for the report.  
Remember to use calculations and figures to support your comments.

(6)

DO NOT WRITE IN THIS AREA

DO NOT WRITE IN THIS AREA

DO NOT WRITE IN THIS AREA

DO NOT WRITE IN THIS AREA

DO NOT WRITE IN THIS AREA

DO NOT WRITE IN THIS AREA



DO NOT WRITE IN THIS AREA

DO NOT WRITE IN THIS AREA

DO NOT WRITE IN THIS AREA

DO NOT WRITE IN THIS AREA

DO NOT WRITE IN THIS AREA

DO NOT WRITE IN THIS AREA

Blank area for student response.

(Total for Question 12 is 6 marks)

**TOTAL FOR SECTION B IS 48 MARKS**  
**TOTAL FOR PAPER IS 64 MARKS**



BLANK PAGE

DO NOT WRITE IN THIS AREA

DO NOT WRITE IN THIS AREA

DO NOT WRITE IN THIS AREA

DO NOT WRITE IN THIS AREA

DO NOT WRITE IN THIS AREA

DO NOT WRITE IN THIS AREA



DO NOT WRITE IN THIS AREA

DO NOT WRITE IN THIS AREA

DO NOT WRITE IN THIS AREA

DO NOT WRITE IN THIS AREA

DO NOT WRITE IN THIS AREA

DO NOT WRITE IN THIS AREA

BLANK PAGE



DO NOT WRITE IN THIS AREA

DO NOT WRITE IN THIS AREA

DO NOT WRITE IN THIS AREA

BLANK PAGE





# Book Your Functional Skills Exam Now!

Intech Centre is a leading training, careers and examination centre based in Islington, London, delivering Functional Skills Maths and English courses and exams for over 26 years.



**Book Now!**



## Book Your Exams & Courses

Qualification	Private Course	Online Exam	Exam in London
Functional Skills Maths Level 1 & 2	<a href="#">Enrol on Course</a>	<a href="#">Book Online Exam</a>	<a href="#">Book London Exam</a>
Functional Skills English Level 1 & 2	<a href="#">Enrol on Course</a>	<a href="#">Book Online Exam</a>	<a href="#">Book London Exam</a>

## Why Intech Centre?

- Over **26 years' experience** as a UK training and exam centre in London.
- **City & Guilds Functional Skills Maths and English exams**, Ofqual regulated and nationally recognised.
- Flexible **online learning** with 24/7 access plus online or centre-based exam options.
- Ideal if you still need GCSE Maths or English equivalent for university entry, teacher training, apprenticeships or employment.

CALL US FOR MORE INFORMATION:



**020 7354 5655**



**www.intechcentre.com**



**info@intechcentre.com**