



# FUNCTIONAL SKILLS MATHS & ENGLISH

## LEVEL 1 & 2 EXAMS

### WHO WE ARE

## Leading training company for 26 years

Intech Centre is an established training provider based in Islington, London, with over 26 years of experience in delivering education, employability and digital skills programmes.

Intech Centre specialises in **Functional Skills English and Maths Level 1 & 2**, helping learners successfully pass Level 1 and Level 2 Functional Skills exams required for university entry, apprenticeships, teacher training, nursing courses and many other professional pathways.

Thousands of learners have used our resources, courses and exam services to achieve nationally recognised qualifications.

[BOOK NOW](#)[LEARN MORE](#)

*\* The materials in this document are the intellectual property of the relevant awarding organisation and are shared for educational and revision purposes only. Intech Centre does not claim ownership of these materials and all rights remain with the respective awarding body.*

### SERVICES

## Courses

- Functional Skills Maths
- Functional Skills English

## Tutoring

- Functional Skills Maths & English Exam Tutoring

## EXAMS

- ➔ Functional Skills **Maths** Level 1 or 2 Exam **in London**
- ➔ Functional Skills **English** Level 1 or 2 Exam **in London**
- ➔ **Online** Functional Skills **Maths** Level 1 or 2 Exam
- ➔ **Online** Functional Skills **English** Level 1 or 2 Exam



[www.intechcentre.com](http://www.intechcentre.com)



362 Essex Road  
Islington N1 3PD



020 7354 5655

**BOOK YOUR FUNCTIONAL SKILLS EXAM NOW!**

## NCFE Level 2 Functional Skills Qualification in Mathematics (603/5060/X)

Paper number: P001372  
Section A: Non-calculator Test



**Assessment window:** Monday 7 September 2020 – Friday 11 September 2020  
**Time allowed:** 30 minutes

### Learner instructions

- Answer **all** questions.
- Read each question carefully.
- Write your answers in the spaces provided.
- Show your working, as marks may be awarded for working.
- State units in your answers, where appropriate.
- Check your work.

### Learner information

- Section A contains **Activity 1** only.
- The maximum mark for this section is **15**.
- The marks available for **each** question are shown in brackets.

### Resources

You will need a:

- pen, with black or blue ink
- pencil and eraser
- 30 cm ruler
- protractor.

To be completed by the examiner		Mark
A	Activity 1	/ 15
B	Activity 2	/ 15
	Activity 3	/ 15
	Activity 4	/ 15
TOTAL MARK		/ 60

If extra pages are used, please make sure your name and centre name are on them and they are securely fastened to this booklet.

**Please complete the details below clearly and in BLOCK CAPITALS.**

Learner name \_\_\_\_\_

Centre name \_\_\_\_\_

Learner number

Centre number

**Do not turn over until the invigilator tells you to do so.**

**This page is intentionally left blank.**

PAST PAPER

**Activity 1: Building blocks**

**1 (a)** Noah's hobby is building models using plastic blocks.

He is making a model of a town.

Noah has opened a new model building set.

Inside is a large bag of coloured blocks:

Colour	Number
White	75
Red	276
Yellow	45
Green	50
Blue	154

What percentage of the blocks are red?

**[3 marks]**

PAST PAPER

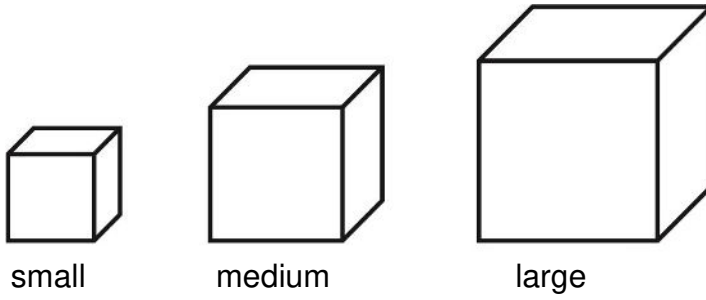
Your answer:

%

**Please turn over**

**1 (b)** Noah has two bags of blocks.

Each bag contains the same number of small, medium and large blocks.



Noah picks one block from each bag at random.

The table below shows the possible outcomes, which are all equally likely:

		1 <sup>st</sup> bag		
		Small (S)	Medium (M)	Large (L)
2 <sup>nd</sup> bag	Small (S)	SS	MS	LS
	Medium (M)	SM	MM	LM
	Large (L)	SL	ML	LL

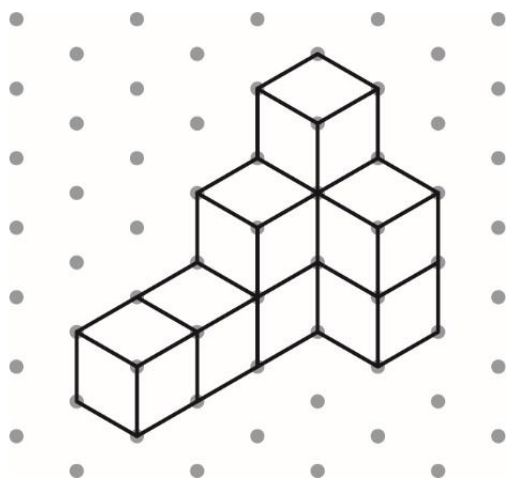
What is the probability that Noah picks two small blocks?

[1 mark]

Your answer:

1 (c) Noah has started to build a wall using cubes.


This is the first diagram in the instructions:



The length of each side of the cubes is 1 cm

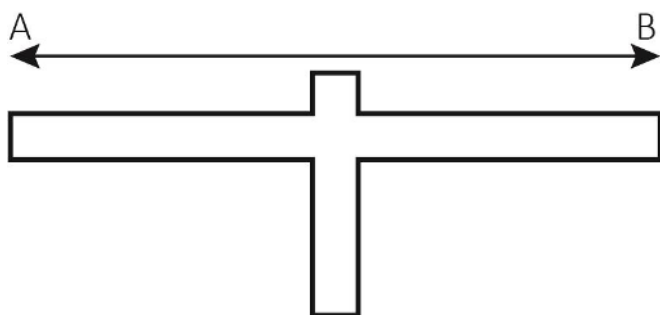
On the grid below, draw the plan view of the wall once Noah has built this part.

[1 mark]



Please turn over

- 1 (d) A statue is 20 m high, and 54 m wide (from A to B).



Not drawn  
accurately

Noah is making a scale model of this statue.

Noah's model statue is 5 cm high.

How wide is Noah's model statue?

[2 marks]

PAST PAPER

Your answer:

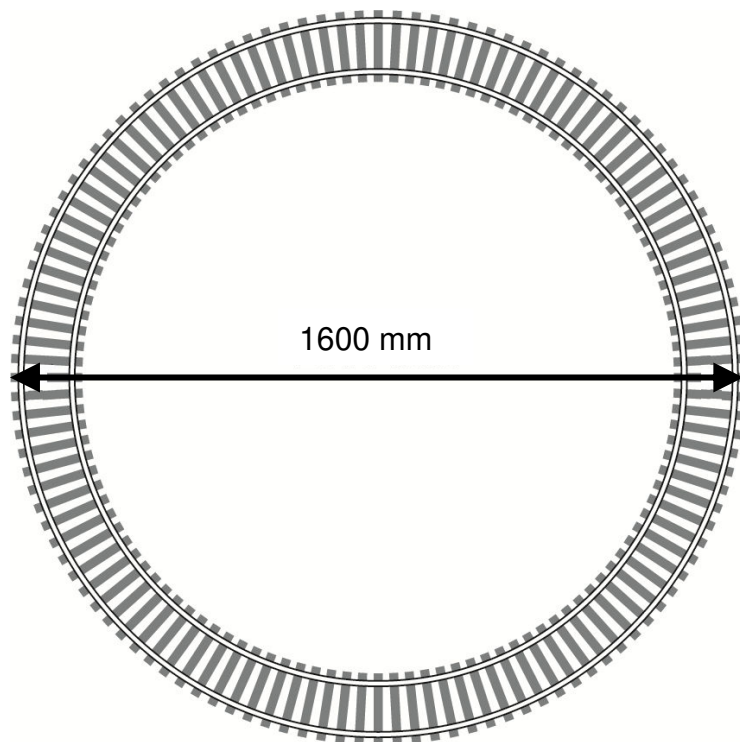
cm

**This page is intentionally left blank.  
Please turn over for the next question.**

1 (e) Noah is making a circular train track.

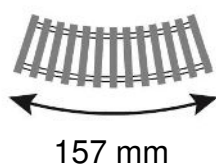
He has some curved pieces of track.

When he puts them together, the curved pieces will make a circular track with diameter 1600 mm



Not drawn  
accurately

The outside length of each curved section is 157 mm



How many curved pieces does Noah need to make the whole circle?

Use  $\pi = 3.14$

[3 marks]

PAST PAPER

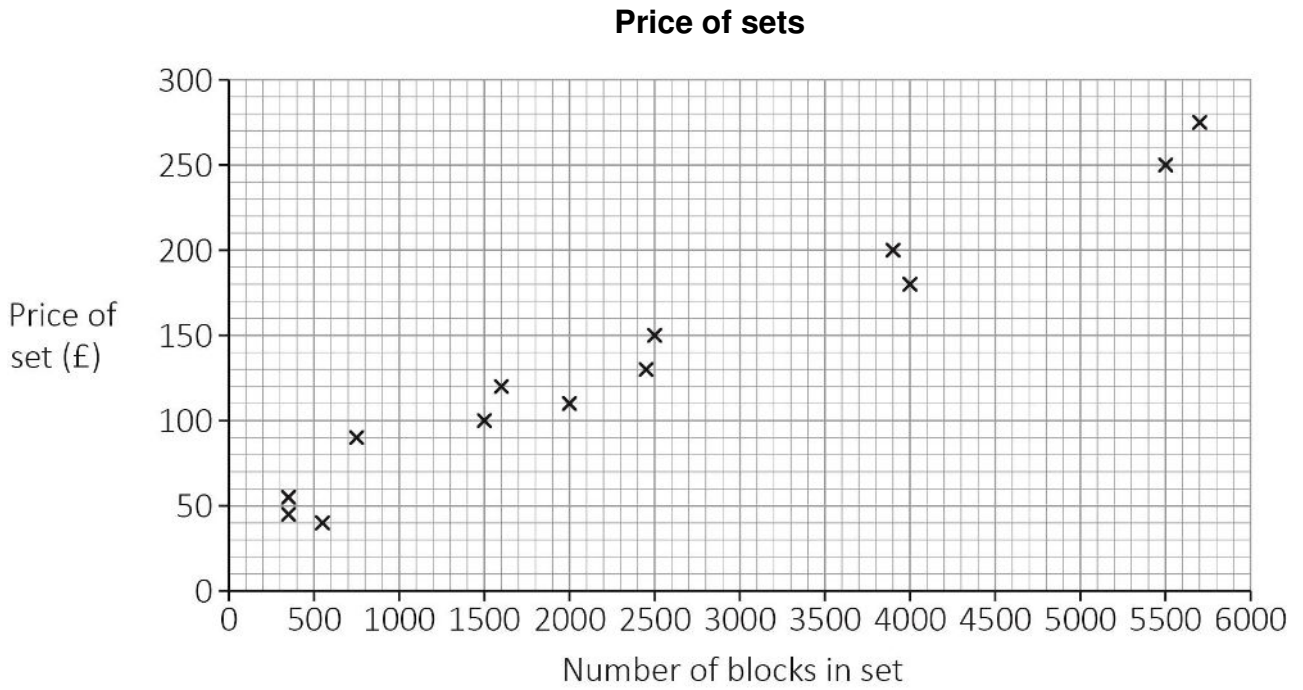
Your answer:

curved pieces

Please turn over

1 (f) Model building blocks are sold in sets.

The scatter diagram shows information about more sets that Noah sees for sale:



Use the scatter diagram to estimate the price of a set containing 3500 blocks.

[2 marks]

Your answer:

£

1 (g) Noah sells a bundle of spare blocks online.

The bundle weighs 3120 g

There are six types of block in the bundle:

Block type	Weight of each block (g)
A	2.7
B	4.5
C	7.4
D	2.9
E	3.5
F	9.0

Use the median weight to work out an estimate of the **number** of blocks in the bundle.

[3 marks]

PAST PAPER

Your answer:

blocks

[Total marks: 15]

This is the end of Section A.

**This page is intentionally left blank.**



# Book Your Functional Skills Exam Now!

Intech Centre is a leading training, careers and examination centre based in Islington, London, delivering Functional Skills Maths and English courses and exams for over 26 years.

[→ Book Now!](#)

## → Book Your Exams & Courses

Qualification	Private Course	Online Exam	Exam in London
Functional Skills Maths Level 1 & 2	<a href="#">Enrol on Course</a>	<a href="#">Book Online Exam</a>	<a href="#">Book London Exam</a>
Functional Skills English Level 1 & 2	<a href="#">Enrol on Course</a>	<a href="#">Book Online Exam</a>	<a href="#">Book London Exam</a>

## Why Intech Centre?

- Over **26 years' experience** as a UK training and exam centre in London.
- **City & Guilds Functional Skills Maths and English exams**, Ofqual regulated and nationally recognised.
- Flexible **online learning** with 24/7 access plus online or centre-based exam options.
- Ideal if you still need GCSE Maths or English equivalent for university entry, teacher training, apprenticeships or employment.

CALL US FOR MORE INFORMATION:

 **020 7354 5655**

 [www.intechcentre.com](http://www.intechcentre.com)

 [info@intechcentre.com](mailto:info@intechcentre.com)